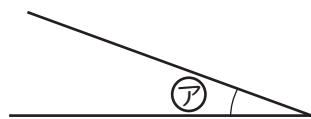


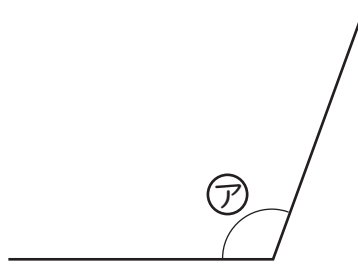
● (ア)の角度をはかりましょう。

1



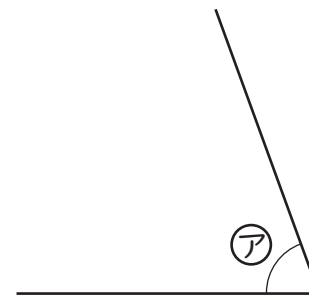
(20°)

2



(110°)

3



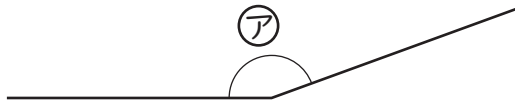
(70°)

4




(170°)

5



(160°)

6



(100°)